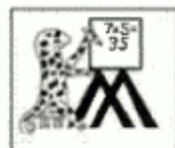


Name _____

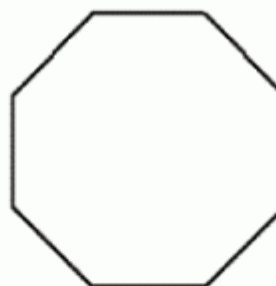
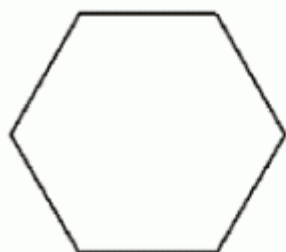
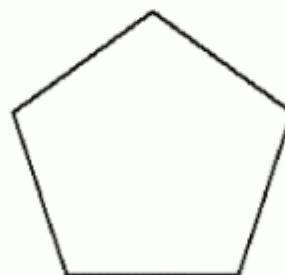
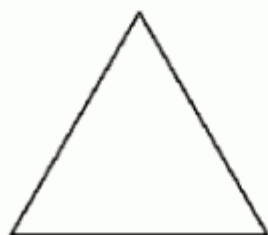
Date _____



TESSELLATIONS – REGULAR POLYGONS

Have a look at these regular polygons and predict which ones tessellate.

Now trace them onto a piece of paper (or print them onto card and cut them out) and try to draw them next to one another with no spaces.



©2010 Math Salamanders Ltd.

MATH-SALAMANDERS.COM