


Name: \_\_\_\_\_


## Basic Shapes

Cut out the shapes at the bottom of the page and glue them into the box with the correct shape name. Write how many sides there are in each shape.



**rectangle**

\_\_\_\_\_  
\_\_\_\_\_ sides




**triangle**

\_\_\_\_\_  
\_\_\_\_\_ sides




**square**

\_\_\_\_\_  
\_\_\_\_\_ sides




**hexagon**

\_\_\_\_\_  
\_\_\_\_\_ sides



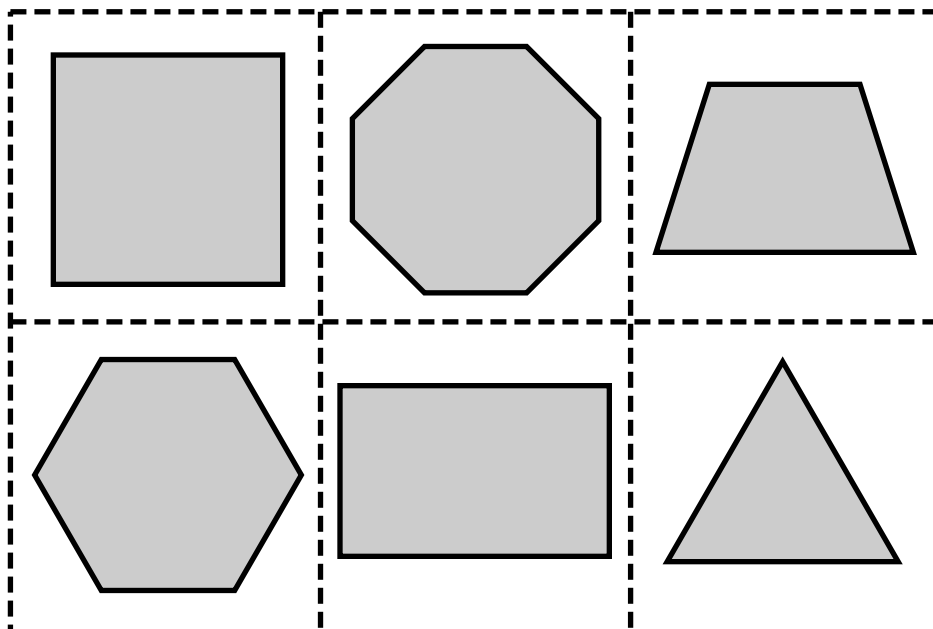
**trapezoid**

\_\_\_\_\_  
\_\_\_\_\_ sides



**octagon**


\_\_\_\_\_  
\_\_\_\_\_ sides



# ANSWER KEY


## Basic Shapes

Cut out the shapes at the bottom of the page and glue them into the box with the correct shape name. Write how many sides there are in each shape.




rectangle

4 sides



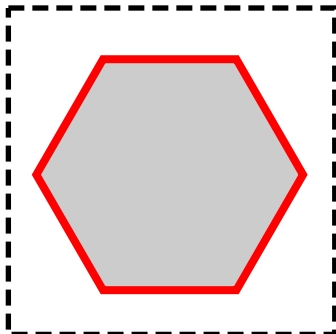
triangle

3 sides




square

4 sides



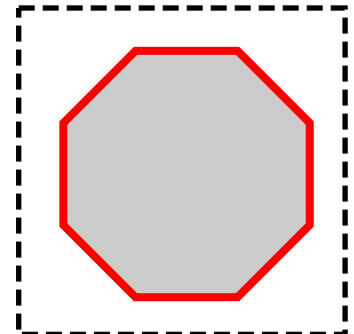
hexagon

6 sides



trapezoid

4 sides



octagon

8 sides