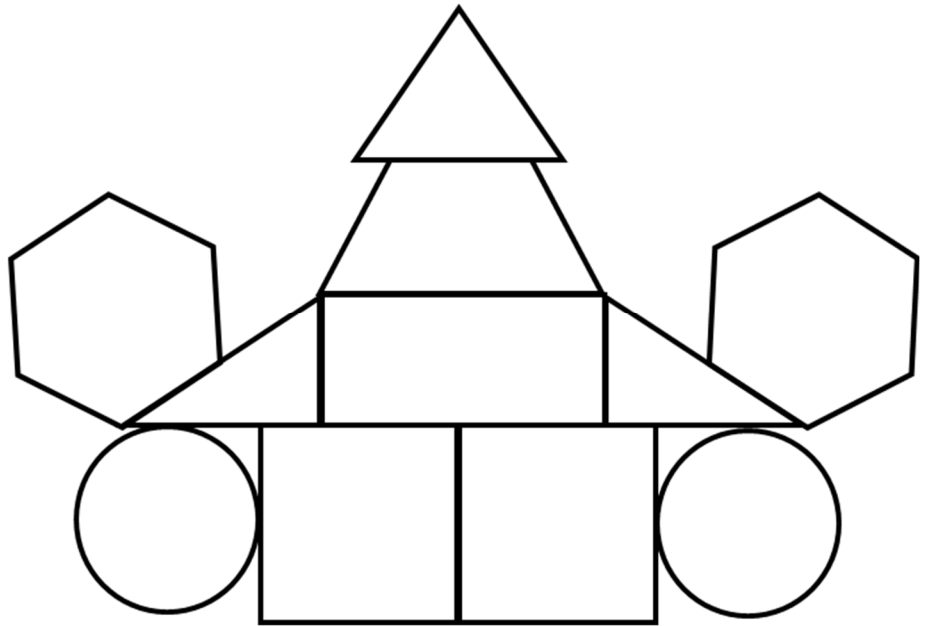


## Identifying and describing shapes

### Grade 1 Geometry Worksheet



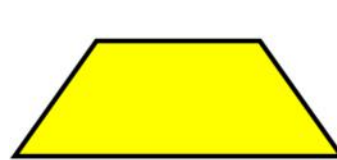


Color all the:

- circles **red**,
- squares **blue**,
- rectangles **green**,
- triangles **orange**,
- hexagons **brown**, and
- trapezoids **pink**.



Draw a line from each description to its matching shape:

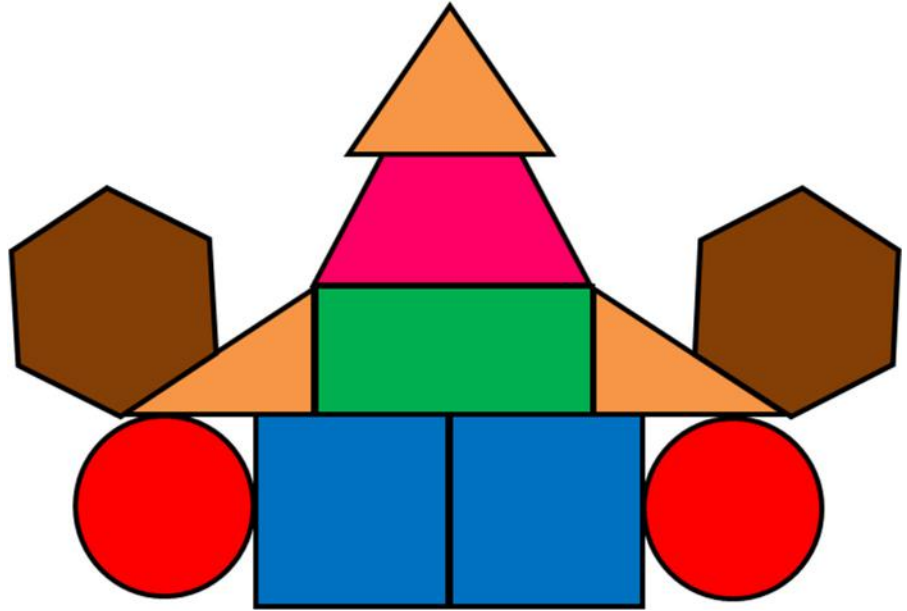
- 1) all 4 sides are the same length
- 2) 2 equal short sides and 2 equal long sides
- 3) 4 sides, but only 2 are equal
- 4) 3 sides
- 5) round
- 6) 6 sides



## Answers

Color all the:

- circles **red**,
- squares **blue**,
- rectangles **green**,
- triangles **orange**,
- hexagons **brown**, and
- trapezoids **pink**.



Draw a line from each description to its matching shape:

- 1) all 4 sides are the same length
- 2) 2 equal short sides and 2 equal long sides
- 3) 4 sides, but only 2 are equal
- 4) 3 sides
- 5) round
- 6) 6 sides

